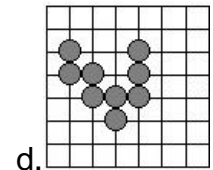
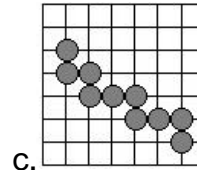
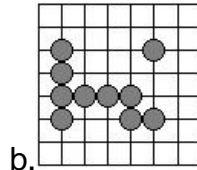
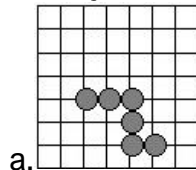
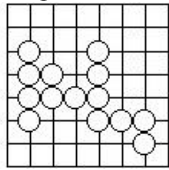
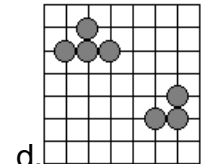
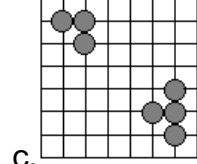
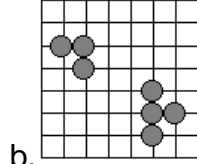
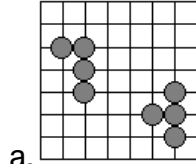
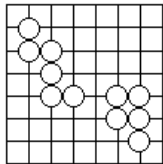


**RAZONAMIENTO ESPACIAL**

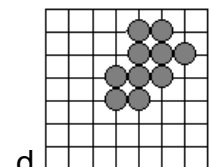
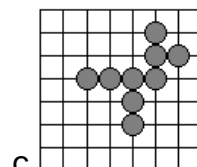
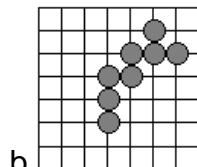
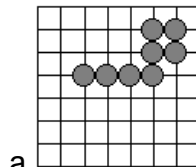
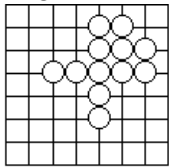
1. ¿Cuál de las piezas encaja con los orificios de la pletina modelo?



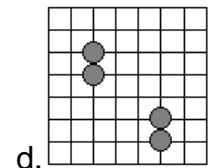
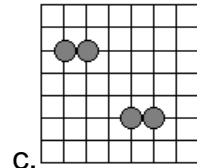
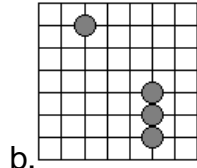
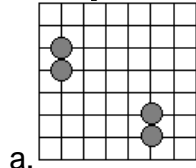
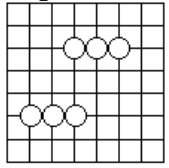
2. ¿Cuál de las piezas encaja con los orificios de la pletina modelo?



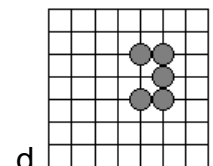
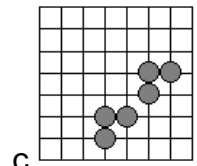
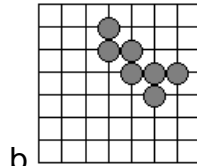
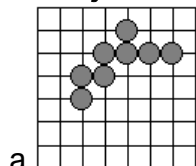
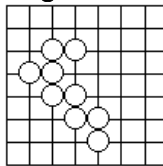
3. ¿Cuál de las piezas encaja con los orificios de la pletina modelo?



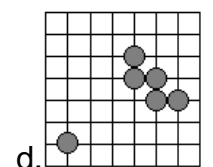
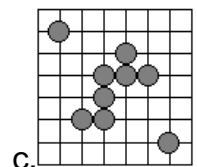
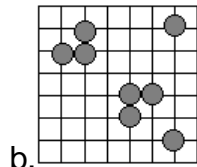
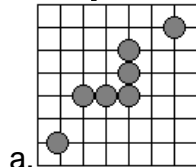
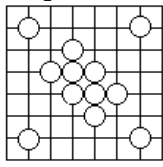
4. ¿Cuál de las piezas encaja con los orificios de la pletina modelo?



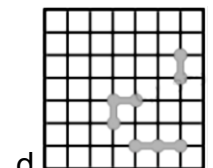
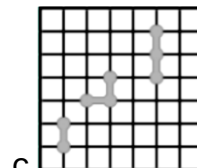
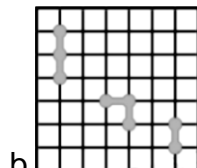
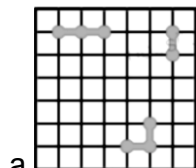
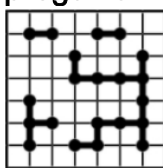
5. ¿Cuál de las piezas encaja con los orificios de la pletina modelo?



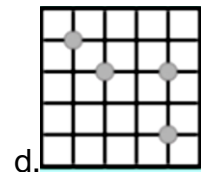
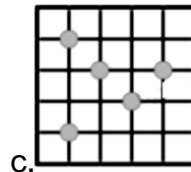
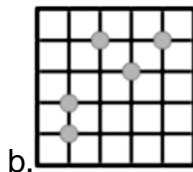
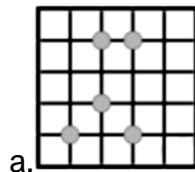
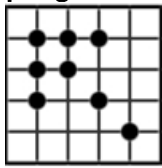
6. ¿Cuál de las piezas encaja con los orificios de la pletina modelo?



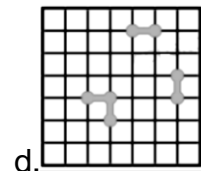
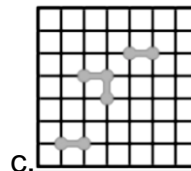
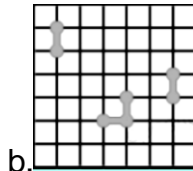
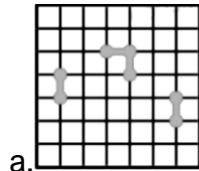
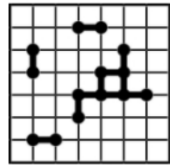
7. ¿Cuál de las respuestas es la única que encaja con los orificios de la pletina de la pregunta?



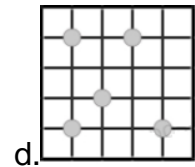
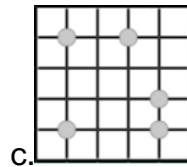
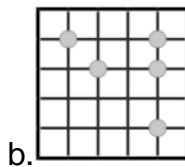
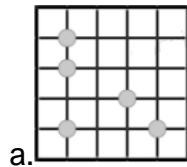
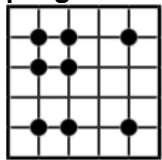
8. ¿Cuál de las respuestas es la única que encaja con los orificios de la pletina de la pregunta?



9. ¿Cuál de las respuestas es la única que encaja con los orificios de la pletina de la pregunta?



10. ¿Cuál de las respuestas es la única que encaja con los orificios de la pletina de la pregunta?



Los siguientes problemas consisten en localizar las coordenadas horizontales y verticales, realizar los cálculos correspondientes según lo propuesto y tomar una decisión sobre la veracidad de los que se afirma en el enunciado.

Si el enunciado es verdadero marca la alternativa A y si es falso la alternativa B

Equivalencias:  $\neq$  diferencia;  $\leq$  menor o igual a;  $\geq$  mayor o igual a.

	1	2	3	4	5	6	7	8	9	10	11	12	13	14	15
A	1	4	-6	5	-9	x8	*2	4	6	7	-4	x5	/3	6	-2
B	4	10	3!	4	-1	x2	4	7	-5	-9	40	10	27	3	-6
C	/4	8	$\sqrt{9}$	7	$\neq$	-5	3	32	7	/6	5!	$\sqrt{4}$	1/3	5	8
D	-1	4	-6	5	-9	x1	/2	x4	6	-17	-14	x5	3/5	21	$\leq$
E	/6	x7	-12	63	4	-15	+7	$\sqrt{36}$	-21	/5	18	/8	14	-13	0
F	$\leq$	x1	x8	-13	81	-22	/2	100	+13	x	24	64	x6	$\neq$	1/7

Responde:

11.  $B_{12} * B_2 = F_8$

A.                      B.

12.  $B_2 + E_4 + E_{15} \neq F_5 - B_2$

A.                      B.

13.  $F_6 F_{10} A_{15} F_{14} C_8 + D_5$

A.                      B.

14.  $D_1 E_2 + B_8 = B_7 x C_{15} x E_{15}$

A.                      B.

15.  $E_8 + C_7 - F_4 \leq F_{11} / D_9$

A.                      B.

16.  $E_7 F_9 A_7 \geq B_{11} - B_1 + B_{13}$

A.                      B.

17.  $B_{13} + C_{15} \neq D_4 x D_{14}$

A.                      B.